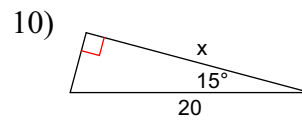
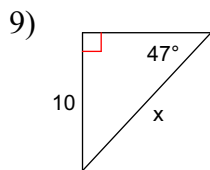
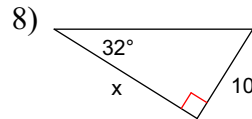
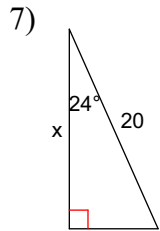
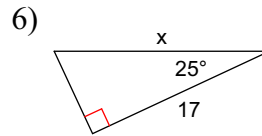
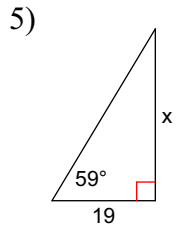
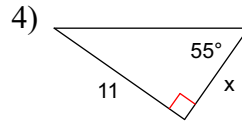
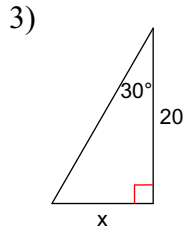
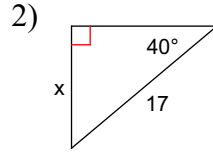
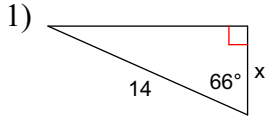


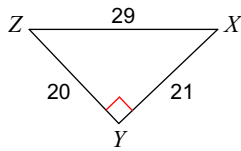
Examen del 10-10

Encuentre la medida del lado que hace falta, redondea tu respuesta.



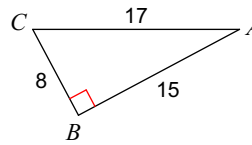
Encuentra el valor de la razón que te pide, usa la calculadora para contestar.

11) $\cos Z$



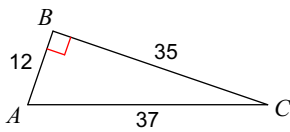
- A) $\frac{29}{21}$ B) $\frac{20}{29}$
 C) $\frac{21}{20}$ D) $\frac{21}{29}$

12) $\sin A$



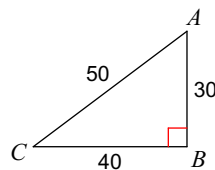
- A) $\frac{8}{17}$ B) $\frac{17}{8}$
 C) $\frac{8}{15}$ D) $\frac{15}{8}$

13) $\tan C$



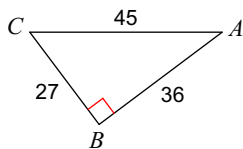
- A) $\frac{12}{37}$ B) $\frac{35}{12}$
 C) $\frac{12}{35}$ D) $\frac{37}{12}$

14) $\tan A$



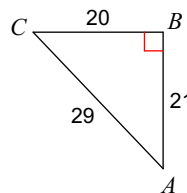
- A) $\frac{4}{5}$ B) $\frac{5}{3}$
 C) $\frac{4}{3}$ D) $\frac{3}{5}$

15) $\cos A$



- A) $\frac{5}{3}$ B) $\frac{4}{5}$
 C) $\frac{4}{3}$ D) $\frac{3}{5}$

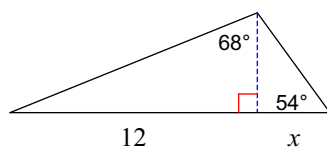
16) $\tan C$



- A) $\frac{29}{20}$ B) $\frac{21}{20}$
 C) $\frac{21}{29}$ D) $\frac{20}{29}$

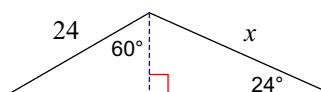
Encuentre la medida del valor de x . Redondea tus respuestas a la décima más cercana. Usa los valores calculados para encontrar el próximo valor para encontrar la contestación final.

17)



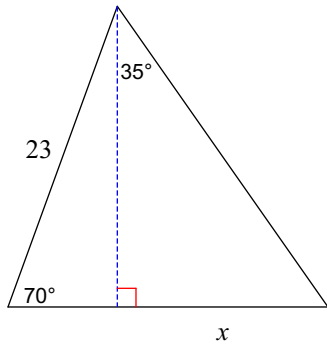
- A) 3.5 B) 4.2
 C) 3.9 D) 2.4

18)



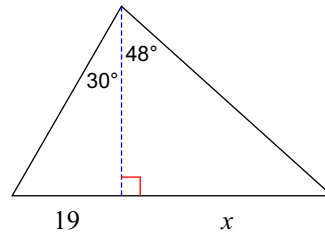
- A) 36.9 B) 30.2
 C) 31 D) 29.5

19)



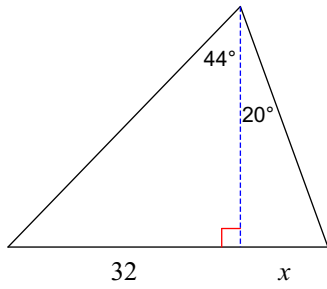
- A) 13.7 B) 16.7
C) 19.7 D) 15.1

20)



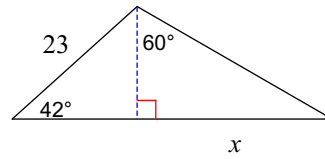
- A) 30.5 B) 36.5
C) 43.2 D) 31.8

21)



- A) 15.9 B) 12
C) 12.2 D) 9.7

22)



- A) 20.4 B) 26.7
C) 24.8 D) 35.5