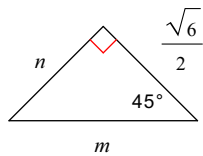


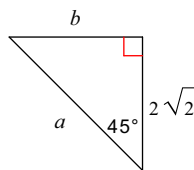
Ejercicios de Práctica para el Examen

Encuentre la medida del lado que hace falta y deje la respuesta de los radicales en su forma mas simple (simplificada). Find the missing side lengths. Leave your answers as radicals in simplest form.

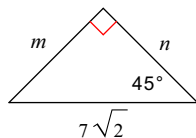
1)



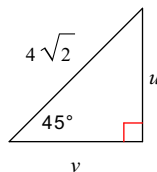
2)



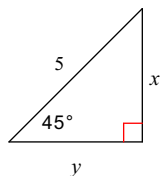
3)



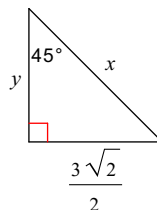
4)



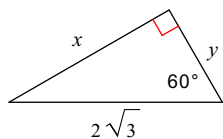
5)



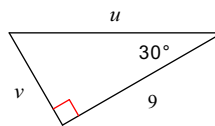
6)



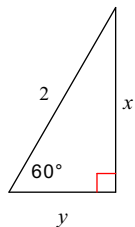
7)



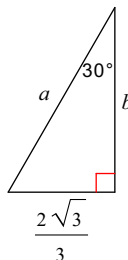
8)



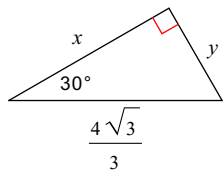
9)



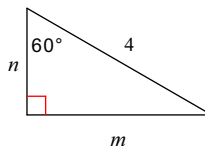
10)



11)

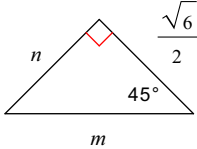


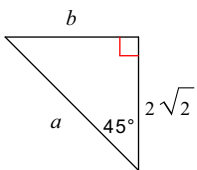
12)

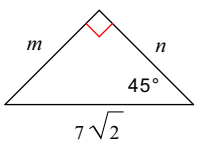


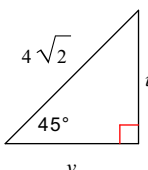
Ejercicios de Práctica para el Examen

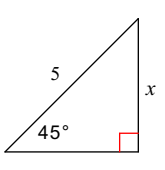
Encuentre la medida del lado que hace falta y deje la respuesta de los radicales en su forma mas simple (simplificada). Find the missing side lengths. Leave your answers as radicals in simplest form.

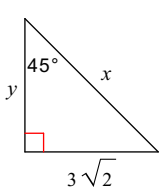
1)  $m = \sqrt{3}, n = \frac{\sqrt{6}}{2}$

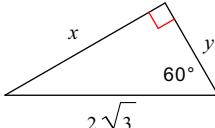
2)  $a = 4, b = 2\sqrt{2}$

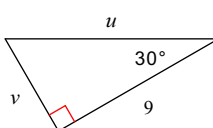
3)  $m = 7, n = 7$

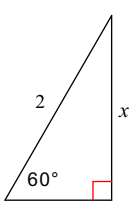
4)  $u = 4, v = 4$

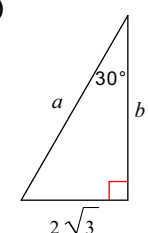
5)  $x = \frac{5\sqrt{2}}{2}, y = \frac{5\sqrt{2}}{2}$

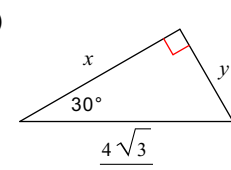
6)  $x = 3, y = \frac{3\sqrt{2}}{2}$

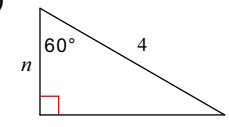
7)  $x = 3, y = \sqrt{3}$

8)  $u = 6\sqrt{3}, v = 3\sqrt{3}$

9)  $x = \sqrt{3}, y = 1$

10)  $a = \frac{4\sqrt{3}}{3}, b = 2$

11)  $x = 2, y = \frac{2\sqrt{3}}{3}$

12)  $m = 2\sqrt{3}, n = 2$